

NUMBER LINE ADDITION

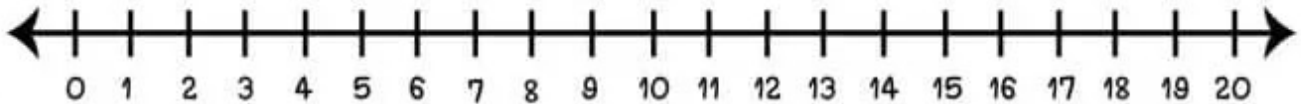
JUMP FORWARD TO THE SUM!

Name: _____

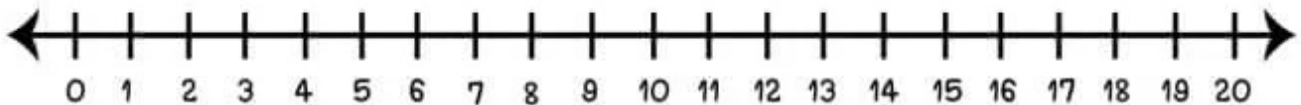
Date: _____

Use the number line to solve each addition problem. Draw a hop from the starting number, count forward, and write the sum in the answer box.

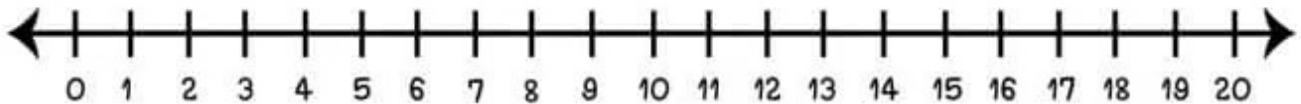
$$10 + 5 + 2 = \square$$



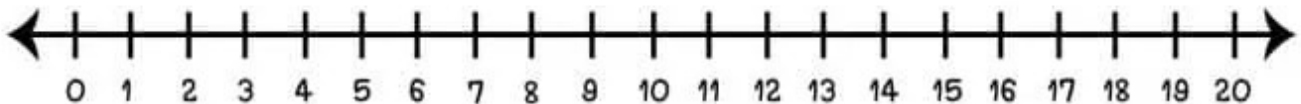
$$8 + 2 + 3 = \square$$



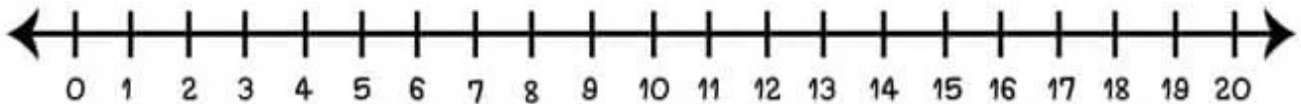
$$6 + 5 + 5 = \square$$



$$7 + 4 + 3 = \square$$



$$8 + 7 + 4 = \square$$



NUMBER LINE ADDITION

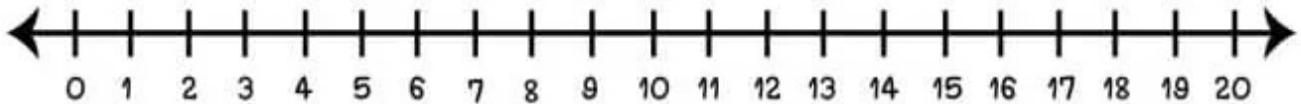
JUMP FORWARD TO THE SUM!

Name: _____

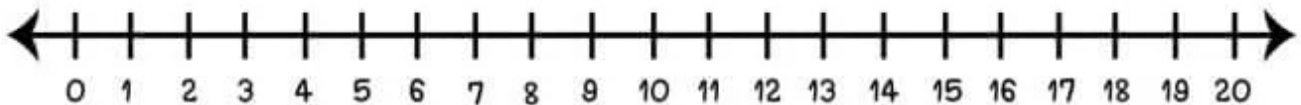
Date: _____

Use the number line to solve each addition problem. Draw a hop from the starting number, count forward, and write the sum in the answer box.

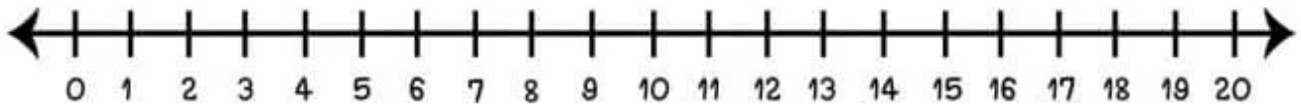
$$10 + 5 + 2 = \square$$



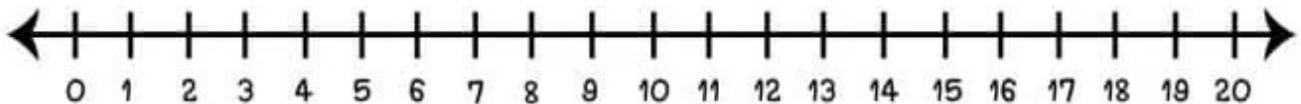
$$8 + 2 + 3 = \square$$



$$6 + 5 + 5 = \square$$



$$7 + 4 + 3 = \square$$



$$8 + 7 + 4 = \square$$

